

# INTRODUCTION TO CALCULUS

MATH 1A

## Unit 3: Limits

### LECTURE

**3.1.** The function  $1/x$  is not defined everywhere. It blows up at  $x = 0$  where we divide by zero. Sometimes however, a function can be **healed** at a point where it is not defined. A silly example is  $f(x) = x^2/x$  which is initially not defined at  $x = 0$  because we divide by  $x$ . The function can be “saved” by noticing that  $f(x) = x$  for all  $x$  different from 0. Functions often can be continued to “forbidden” places if we write the function differently. This can involve dividing out a common factor. Here are some examples:

**3.2. Example.** The function  $f(x) = (x^3 - 1)/(x - 1)$  is at first not defined at  $x = 1$ . But for  $x$  close to 1, nothing really bad happens. We can evaluate the function at points closer and closer to 1 and get closer and closer to 3. We say  $\lim_{x \rightarrow 1} f(x) = 3$ . Indeed, you might have noticed already that  $f(x) = x^2 + x + 1$  by factoring out  $(x - 1)$ . While initially not defined at  $x = 1$ , there is a natural value  $b = 3$  we can assign for  $f(3)$  so that the graph continues nicely through that point.

**3.3. Definition.** We write  $x \rightarrow a$  to indicate that  $x$  **approaches**  $a$ . This approach can be from either side, **from the left**  $x \rightarrow a^-$  or **from the right**  $x \rightarrow a^+$ . A function  $f(x)$  has a **limit** at a point  $a$  if there exists a unique  $b$  such that  $f(x) \rightarrow b$  for  $x \rightarrow a$ . We write  $\lim_{x \rightarrow a} f(x) = b$  if the limit exists and if it is the same value  $b$ , when approaching from either side.<sup>1</sup>

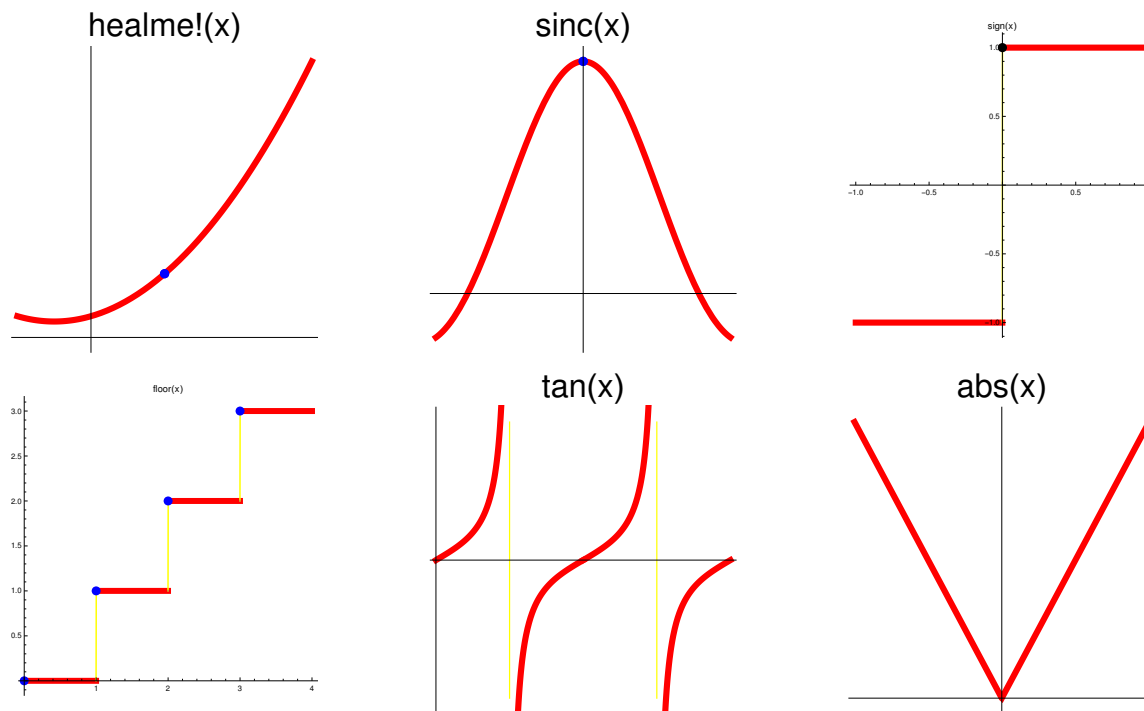
**3.4. Example.** The **sinc function**  $f(x) = \sin(x)/x$  is called  $\text{sinc}(x)$ . It is not defined at  $x = 0$  at first. It appears naturally in geometry as a quotient between the length of a side of a right angle triangle and an arc length of a sector which contains it. We will look at this function a lot also later on and show that the limit of  $f(x)$  exists for  $x \rightarrow 0$ . This fact is important.

**Fundamental theorem of trigonometry.**  $\lim_{x \rightarrow 0} \frac{\sin(x)}{x} = 1$ .

---

<sup>1</sup>Technical: for all  $\epsilon > 0$ , there exists  $\delta > 0$  such that if  $|x - a| < \delta$  then  $|f(x) - b| < \epsilon$ .

**3.5. Example.** The function  $f(x) = x/|x|$  is 1 if  $x > 0$  and  $-1$  if  $x < 0$ . It is not defined at  $x = 0$  and there is no way to assign a value  $b$  at  $x = 0$  in such a way that  $\lim_{x \rightarrow 0} f(x) = b$ . One could define  $f(0) = 0$  and call the function the *sign function*. It is defined everywhere but it is not continuous at 0 as it jumps. We look at continuity in the next lecture.



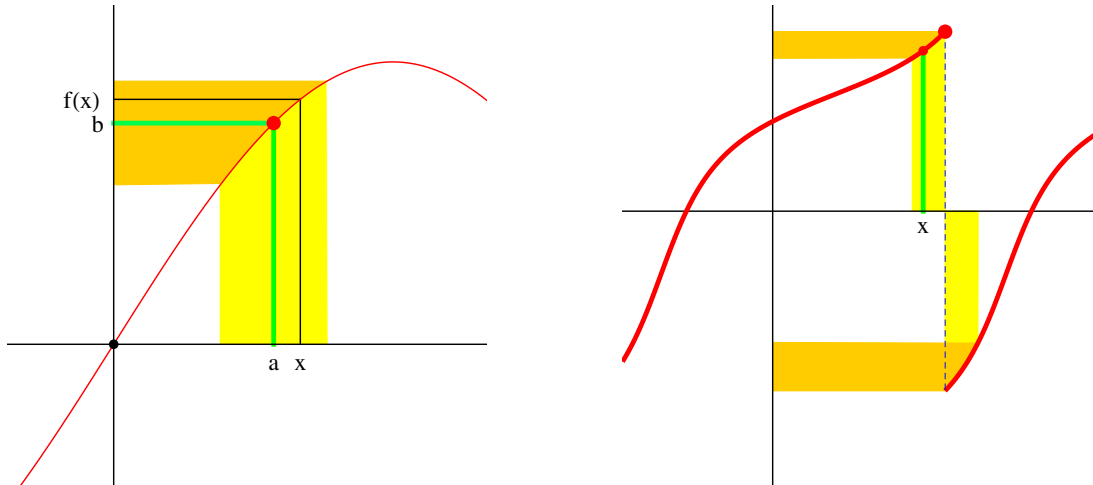
**Figure:** We see the graphs of  $f(x) = (x^3 - 1)/(x - 1)$ , the sinc function  $\text{sinc}(x) = \sin(x)/x$ , the sign function  $\text{sign}(x) = x/|x|$ , the floor function  $\text{floor}(x)$  giving the largest integer smaller or equal to  $x$ , the tan function and the **absolute value function**  $\text{abs}(x) = |x|$ .

**3.6. Example.** The function  $f(x) = \cos(x^2)/(x^4 + 1)$  has the property that  $f(x)$  approaches 1 if  $x$  approaches 0. To evaluate functions at 0, there was no need to take a limit because  $x^4 + 1$  is never zero. The function is everywhere defined. Actually, most functions are nice in the sense that we do not have to worry about limits at most points. In the overwhelming cases of real applications we only have to worry about limits when the function involves division by 0. For example  $f(x) = (x^4 + x^2 + 1)/x$  needs to be investigated more carefully at  $x = 0$ . You see for example that for  $x = 1/1000$ , the function is slightly larger than 1000. We can simplify it to  $x^3 + x + 1/x$  for  $x \neq 0$ . There is no limit  $\lim_{x \rightarrow 0} f(x)$  because  $1/x$  has no limit.

**3.7. Example.** Also, for  $\sin$  and  $\cos$ , the limit  $\lim_{x \rightarrow a} f(x) = f(a)$  is defined. This extends to **trigonometric polynomials** like  $\sin(3x) + \cos(5x)$ . The function  $\tan(x)$  however has no limit at  $x = \pi/2$ . No finite value  $b$  can be found so that  $\tan(\pi/2+h) \rightarrow b$  for  $h \rightarrow 0$ . This is due to the fact that  $\cos(x)$  is zero at  $\pi/2$ .

**3.8. Example.** The **cube root function**  $f(x) = x^{1/3}$  is defined for all  $x$  and even  $x = 0$ . For the square root function  $f(x) = \sqrt{x}$  we have to be aware that for  $x < -0$ , it is not defined. The domain of the is function is the positive real axis.

Why do we worry about limits? One of the main reasons will be that we will soon define the derivative and integral using limits. A second reason is that limits of polynomials lead to functions like the exponential function or logarithm function. An other reason is that one can use limits to define numbers like  $\pi = 3.1415926\dots$ . In the next lecture, we also look at the important concept of continuity which refers to limits.



**Figure:** To the left we see a case, where the limit exists at  $x = a$ . If  $x$  approaches  $a$  then  $f(x)$  approaches  $b$ . To the right we see the function  $f(x) = \arctan(\tan(x) + 1)$ , where  $\arctan$  is the inverse of  $\tan$ . The limit does not exist for  $a = \pi/2$ . If we approach  $a$  from the right, we get the limit  $-\pi/2$ . From the left, we get the limit  $f(\pi/2) = \pi/2$ . Note that  $f$  is not defined at  $x = \pi/2$  because  $\tan(x)$  becomes infinite there.

**Example:** Determine from the following functions whether the limits  $\lim_{x \rightarrow 0} f(x)$  exist. If it does, find it.

- |                               |                                 |
|-------------------------------|---------------------------------|
| a) $f(x) = \cos(x)/\cos(2x)$  | b) $f(x) = \tan(x)/x$           |
| c) $f(x) = (x^2 - x)/(x - 1)$ | d) $f(x) = (x^4 - 1)/(x^2 - 1)$ |
| e) $f(x) = (x + 1)/(x - 1)$   | f) $f(x) = x/\sin(x)$           |
| g) $f(x) = 5x/\sin(6x)$       | h) $f(x) = \sin(x)/x^2$         |
| i) $f(x) = \sin(x)/\sin(2x)$  | j) $f(x) = \exp(x)/x$           |

**3.9.** The following properties hold for limits:

$$\begin{aligned} \lim_{x \rightarrow a} f(x) = b \text{ and } \lim_{x \rightarrow a} g(x) = c &\text{ implies } \lim_{x \rightarrow a} f(x) + g(x) = b + c. \\ \lim_{x \rightarrow a} f(x) = b \text{ and } \lim_{x \rightarrow a} g(x) = c &\text{ implies } \lim_{x \rightarrow a} f(x) \cdot g(x) = b \cdot c. \\ \lim_{x \rightarrow a} f(x) = b \text{ and } \lim_{x \rightarrow a} g(x) = c \neq 0 &\text{ implies } \lim_{x \rightarrow a} f(x)/g(x) = b/c. \end{aligned}$$

**3.10.** This implies we can sum up and multiply or divide functions which have limits: Examples: Polynomials like  $x^5 - 2x + 6$  or trig polynomials like  $\sin(3x) + \cos(5x)$  have limits everywhere. Rational functions like  $(x^2 - 1)/(x^2 + 1)$  have limits everywhere if the denominator has no roots. Functions like  $\cos^2(x) \tan(x)/\sin(x)$  can be healed by simplification. Prototype functions like  $\sin(x)/x$  have limits everywhere.

## HOMEWORK

**Problem 3.1:** Find the limits  $x \rightarrow 0$ . You can use what we have established about  $\text{sinc}(x)$ .

a)  $f(x) = \sin(13x)/x$

b)  $f(x) = (x^6 - 1)/(x - 1)$

c)  $f(x) = \sin^2(9x)/x^2$ ,

d)  $f(x) = \sin(11x)/\sin(7x)$

**Problem 3.2:** a) Graph of the function

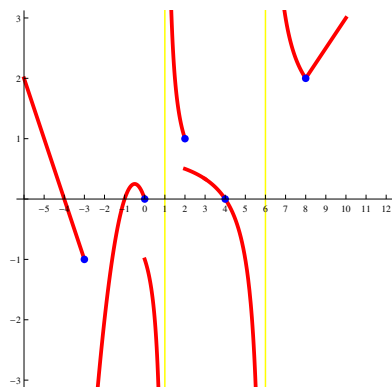
$$f(x) = \frac{(1 - \cos(x))}{x^2}.$$

b) Where is the function  $f$  defined? Can you find the limit at the places, where it is not defined? Hint: **remember double angle formulas**

c) Verify that  $f(x) = \exp_h(x) = (1 + h)^{x/h}$  satisfies  $[f(x + h) - f(x)]/h = f(x)$ .

**Remark.** We define  $e^x = \exp(x) = \lim_{h \rightarrow 0} \exp_h(x)$ .

**Problem 3.3:** Find all points  $x$  at which the function given in the picture has no limits.



**Problem 3.4:** Find the limits for  $x \rightarrow 1$ :

a)  $f(x) = (x^2 - 2x + 1)/(x - 1)$ ,

b)  $f(x) = \frac{\sin((x-1)) 2^x}{(x-1) 5^x}$ .

c)  $f(x) = \sin^2(x - 1)/(x^2 - 2x + 1)$ ,

d)  $f(x) = \frac{\sin(\sin(x))}{\sin(x)}$ .

**Problem 3.5:** We explore in this problem the limit of the function  $f(x) = x^x$  if  $x \rightarrow 0$ . Write a short paragraph about it. It should involve some experiments and cases. Can we find a limit in general? Take a calculator or use Wolfram  $\alpha$  and experiment. What do you see when  $x \rightarrow 0$ ? Can you find an explanation for your experiments?